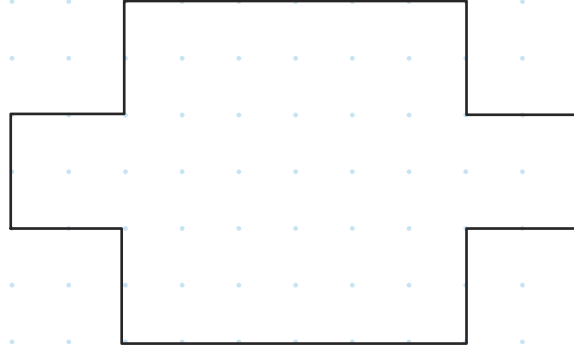


1.

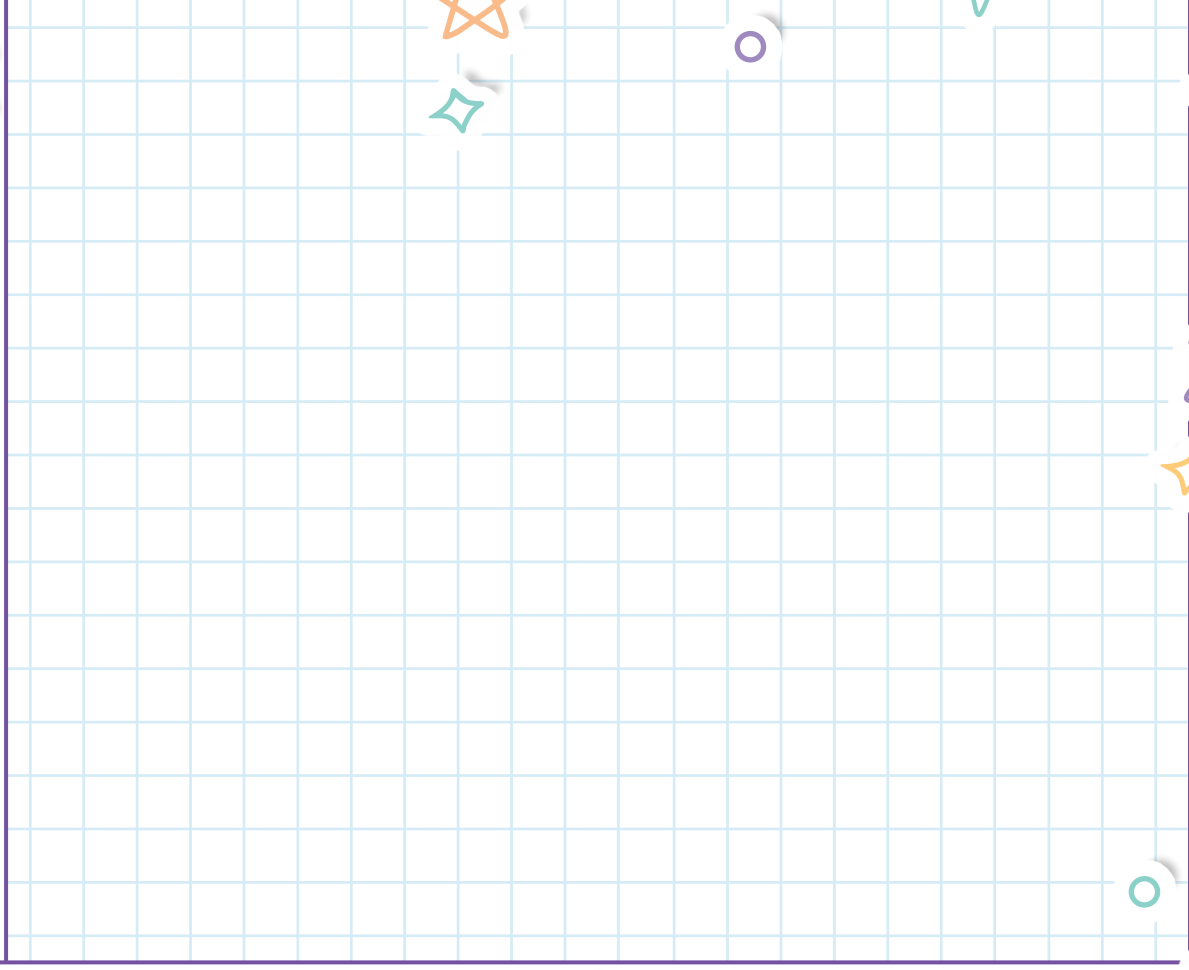
Draw all the lines of symmetry on this shape.



2.

Sara is going on holiday. She has to travel 480 km by car.  
How many miles will she travel?

Use  $8\text{km} = 5\text{ miles}$ .



3.

$\frac{1}{7}$  of a number is 27.

What is the number?

4.

Tick the fractions that are equal to 60%.

$$\frac{3}{5}$$

$$\frac{6}{8}$$


$$1\frac{1}{6}$$

$$\frac{9}{15}$$

$$\frac{6}{10}$$

5.

Fill in the missing coordinates for point a.




(      )

6.

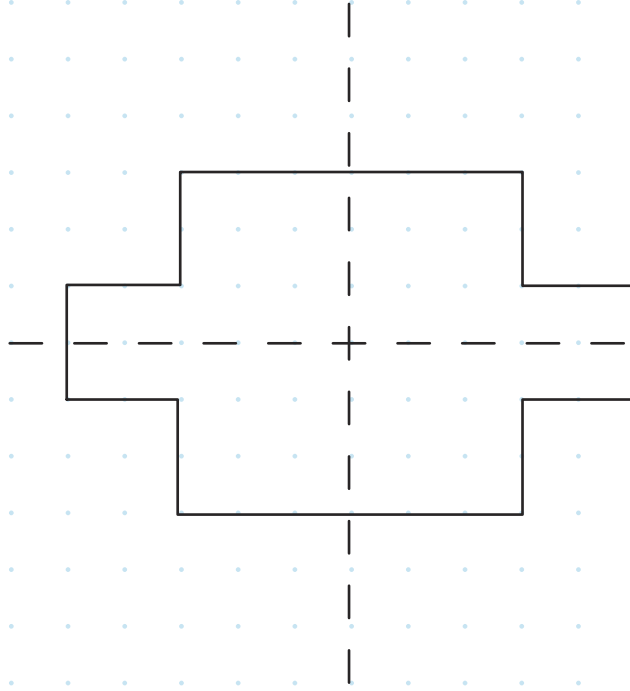
Joe made a cuboid with centimetre cubes.

Radhika made a cuboid 3cm taller than Joe's. How many cubes did Radhika use for her cuboid?



1.

Draw all the lines of symmetry on this shape.



2.

Sara is going on holiday. She has to travel 480 km by car.  
How many miles will she travel?

Use 8km = 5 miles.

$$480 \div 8 = 60$$

$$60 \times 5 = 300 \text{ miles}$$

3.

$\frac{1}{7}$  of a number is 27.

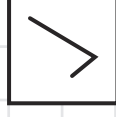
What is the number?

$$27 \times 7 = 189$$

4.

Tick the fractions that are equal to 60%.

$$\frac{3}{5}$$



$$\frac{6}{8}$$



$$1\frac{1}{6}$$



$$\frac{9}{15}$$

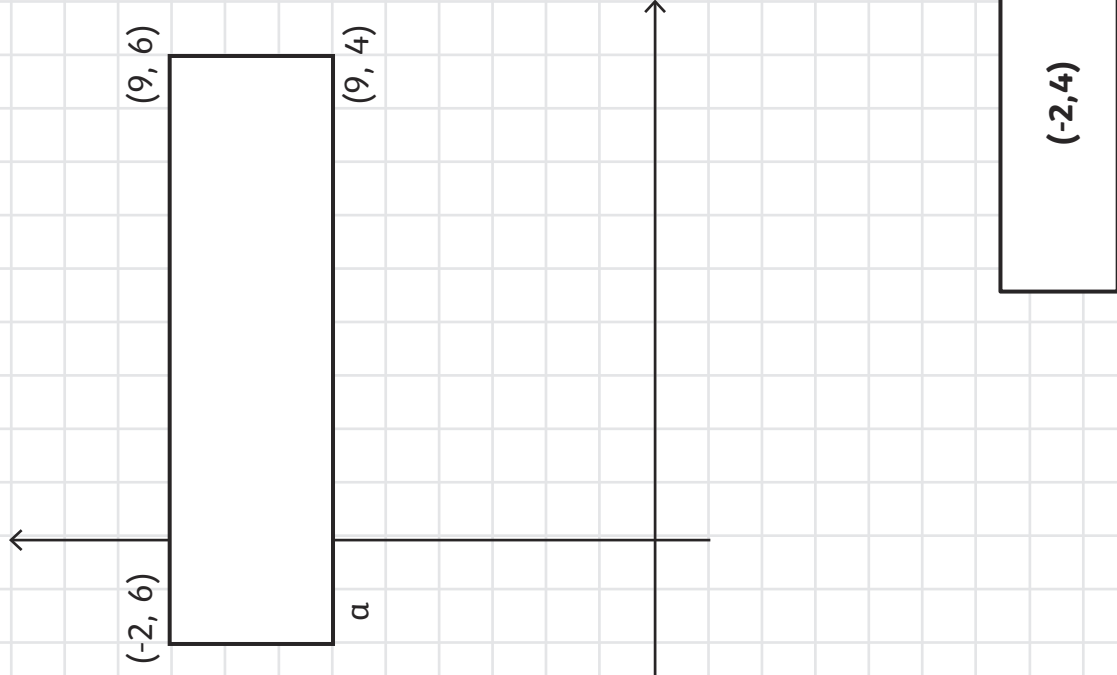


$$\frac{6}{10}$$



5.


Fill in the missing coordinates for point a.



6.

Joe made a cuboid with centimetre cubes.

Radhika made a cuboid 3cm taller than Joe's. How many cubes did Radhika use for her cuboid?



$$10 \times 4 \times 6 = 240 \text{ cubes}$$

We hope you find the information on our website and resources useful. As far as possible, the contents of this resource are reflective of current professional research. However, please be aware that every child is different and information can quickly become out of date. The information given here is intended for general guidance purposes only and may not apply to your specific situation.



visit [twinkl.com](https://www.twinkl.com)

